

Review Exercises

See CalcChat.com for tutorial help and worked-out solutions to odd-numbered exercises.

Finding the Derivative by the Limit Process In Exercises 1–4, find the derivative of the function by the limit process.

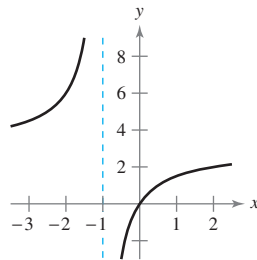
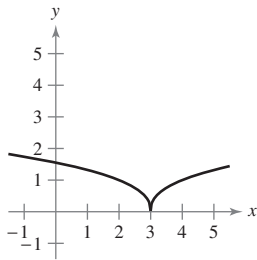
- $f(x) = 12$
- $f(x) = 5x - 4$
- $f(x) = x^2 - 4x + 5$
- $f(x) = \frac{6}{x}$

Using the Alternative Form of the Derivative In Exercises 5 and 6, use the alternative form of the derivative to find the derivative at $x = c$ (if it exists).

- $g(x) = 2x^2 - 3x$, $c = 2$
- $f(x) = \frac{1}{x+4}$, $c = 3$

Determining Differentiability In Exercises 7 and 8, describe the x -values at which f is differentiable.

- $f(x) = (x - 3)^{2/5}$
- $f(x) = \frac{3x}{x+1}$



Finding a Derivative In Exercises 9–20, use the rules of differentiation to find the derivative of the function.

- $y = 25$
- $f(t) = 4t^4$
- $f(x) = x^3 - 11x^2$
- $g(s) = 3s^5 - 2s^4$
- $h(x) = 6\sqrt{x} + 3\sqrt[3]{x}$
- $f(x) = x^{1/2} - x^{-1/2}$
- $g(t) = \frac{2}{3t^2}$
- $h(x) = \frac{8}{5x^4}$
- $f(\theta) = 4\theta - 5\sin\theta$
- $g(\alpha) = 4\cos\alpha + 6$
- $f(\theta) = 3\cos\theta - \frac{\sin\theta}{4}$
- $g(\alpha) = \frac{5\sin\alpha}{3} - 2\alpha$

Finding the Slope of a Graph In Exercises 21–24, find the slope of the graph of the functions at the given point.

- $f(x) = \frac{27}{x^3}$, $(3, 1)$
- $f(x) = 3x^2 - 4x$, $(1, -1)$
- $f(x) = 2x^4 - 8$, $(0, -8)$
- $f(\theta) = 3\cos\theta - 2\theta$, $(0, 3)$

25. Vibrating String When a guitar string is plucked, it vibrates with a frequency of $F = 200\sqrt{T}$, where F is measured in vibrations per second and the tension T is measured in pounds. Find the rates of change of F when (a) $T = 4$ and (b) $T = 9$.

26. Volume The surface area of a cube with sides of length ℓ is given by $S = 6\ell^2$. Find the rates of change of the surface area with respect to ℓ when (a) $\ell = 3$ inches and (b) $\ell = 5$ inches.

Vertical Motion In Exercises 27 and 28, use the position function $s(t) = -16t^2 + v_0t + s_0$ for free-falling objects.

- A ball is thrown straight down from the top of a 600-foot building with an initial velocity of -30 feet per second.
 - Determine the position and velocity functions for the ball.
 - Determine the average velocity on the interval $[1, 3]$.
 - Find the instantaneous velocities when $t = 1$ and $t = 3$.
 - Find the time required for the ball to reach ground level.
 - Find the velocity of the ball at impact.
- To estimate the height of a building, a weight is dropped from the top of the building into a pool at ground level. The splash is seen 9.2 seconds after the weight is dropped. What is the height (in feet) of the building?

Finding a Derivative In Exercises 29–40, use the Product Rule or the Quotient Rule to find the derivative of the function.

- $f(x) = (5x^2 + 8)(x^2 - 4x - 6)$
- $g(x) = (2x^3 + 5x)(3x - 4)$
- $h(x) = \sqrt{x} \sin x$
- $f(t) = 2t^5 \cos t$
- $f(x) = \frac{x^2 + x - 1}{x^2 - 1}$
- $f(x) = \frac{2x + 7}{x^2 + 4}$
- $y = \frac{x^4}{\cos x}$
- $y = \frac{\sin x}{x^4}$
- $y = 3x^2 \sec x$
- $y = 2x - x^2 \tan x$
- $y = x \cos x - \sin x$
- $g(x) = 3x \sin x + x^2 \cos x$

Finding an Equation of a Tangent Line In Exercises 41–44, find an equation of the tangent line to the graph of f at the given point.

- $f(x) = (x + 2)(x^2 + 5)$, $(-1, 6)$
- $f(x) = (x - 4)(x^2 + 6x - 1)$, $(0, 4)$
- $f(x) = \frac{x + 1}{x - 1}$, $\left(\frac{1}{2}, -3\right)$
- $f(x) = \frac{1 + \cos x}{1 - \cos x}$, $\left(\frac{\pi}{2}, 1\right)$

Finding a Second Derivative In Exercises 45–50, find the second derivative of the function.

- $g(t) = -8t^3 - 5t + 12$
- $h(x) = 6x^{-2} + 7x^2$
- $f(x) = 15x^{5/2}$
- $f(x) = 20\sqrt[5]{x}$
- $f(\theta) = 3 \tan \theta$
- $h(t) = 10 \cos t - 15 \sin t$

51. Acceleration The velocity of an object in meters per second is $v(t) = 20 - t^2$, $0 \leq t \leq 6$. Find the velocity and acceleration of the object when $t = 3$.

52. Acceleration The velocity of an automobile starting from rest is

$$v(t) = \frac{90t}{4t + 10}$$

where v is measured in feet per second. Find the acceleration at (a) 1 second, (b) 5 seconds, and (c) 10 seconds.

Finding a Derivative In Exercises 53–64, find the derivative of the function.

- 53. $y = (7x + 3)^4$
- 54. $y = (x^2 - 6)^3$
- 55. $y = \frac{1}{x^2 + 4}$
- 56. $f(x) = \frac{1}{(5x + 1)^2}$
- 57. $y = 5 \cos(9x + 1)$
- 58. $y = 1 - \cos 2x + 2 \cos^2 x$
- 59. $y = \frac{x}{2} - \frac{\sin 2x}{4}$
- 60. $y = \frac{\sec^7 x}{7} - \frac{\sec^5 x}{5}$
- 61. $y = x(6x + 1)^5$
- 62. $f(s) = (s^2 - 1)^{5/2}(s^3 + 5)$
- 63. $f(x) = \frac{3x}{\sqrt{x^2 + 1}}$
- 64. $h(x) = \left(\frac{x + 5}{x^2 + 3}\right)^2$

Evaluating a Derivative In Exercises 65–70, find and evaluate the derivative of the function at the given point.

- 65. $f(x) = \sqrt{1 - x^3}$, $(-2, 3)$
- 66. $f(x) = \sqrt[3]{x^2 - 1}$, $(3, 2)$
- 67. $f(x) = \frac{4}{x^2 + 1}$, $(-1, 2)$
- 68. $f(x) = \frac{3x + 1}{4x - 3}$, $(4, 1)$
- 69. $y = \frac{1}{2} \csc 2x$, $\left(\frac{\pi}{4}, \frac{1}{2}\right)$
- 70. $y = \csc 3x + \cot 3x$, $\left(\frac{\pi}{6}, 1\right)$

Finding a Second Derivative In Exercises 71–74, find the second derivative of the function.

- 71. $y = (8x + 5)^3$
- 72. $y = \frac{1}{5x + 1}$
- 73. $f(x) = \cot x$
- 74. $y = \sin^2 x$

75. Refrigeration The temperature T (in degrees Fahrenheit) of food in a freezer is

$$T = \frac{700}{t^2 + 4t + 10}$$

where t is the time in hours. Find the rate of change of T with respect to t at each of the following times.

- (a) $t = 1$ (b) $t = 3$ (c) $t = 5$ (d) $t = 10$

76. Harmonic Motion The displacement from equilibrium of an object in harmonic motion on the end of a spring is

$$y = \frac{1}{4} \cos 8t - \frac{1}{4} \sin 8t$$

where y is measured in feet and t is the time in seconds. Determine the position and velocity of the object when $t = \pi/4$.

Finding a Derivative In Exercises 77–82, find dy/dx by implicit differentiation.

- 77. $x^2 + y^2 = 64$
- 78. $x^2 + 4xy - y^3 = 6$
- 79. $x^3y - xy^3 = 4$
- 80. $\sqrt{xy} = x - 4y$
- 81. $x \sin y = y \cos x$
- 82. $\cos(x + y) = x$

Tangent Lines and Normal Lines In Exercises 83 and 84, find equations for the tangent line and the normal line to the graph of the equation at the given point. (The normal line at a point is perpendicular to the tangent line at the point.) Use a graphing utility to graph the equation, the tangent line, and the normal line.

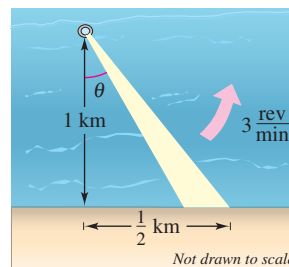
- 83. $x^2 + y^2 = 10$, $(3, 1)$
- 84. $x^2 - y^2 = 20$, $(6, 4)$

85. Rate of Change A point moves along the curve $y = \sqrt{x}$ in such a way that the y -value is increasing at a rate of 2 units per second. At what rate is x changing for each of the following values?

- (a) $x = \frac{1}{2}$ (b) $x = 1$ (c) $x = 4$

86. Surface Area All edges of a cube are expanding at a rate of 8 centimeters per second. How fast is the surface area changing when each edge is 6.5 centimeters?

87. Linear vs. Angular Speed A rotating beacon is located 1 kilometer off a straight shoreline (see figure). The beacon rotates at a rate of 3 revolutions per minute. How fast (in kilometers per hour) does the beam of light appear to be moving to a viewer who is $\frac{1}{2}$ kilometer down the shoreline?



88. Moving Shadow A sandbag is dropped from a balloon at a height of 60 meters when the angle of elevation to the sun is 30° (see figure). The position of the sandbag is

$$s(t) = 60 - 4.9t^2.$$

Find the rate at which the shadow of the sandbag is traveling along the ground when the sandbag is at a height of 35 meters.

